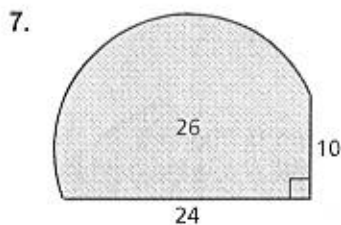
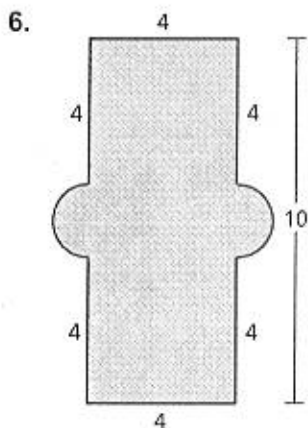
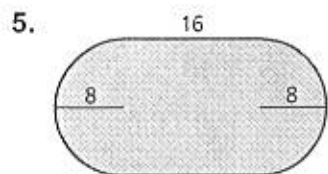
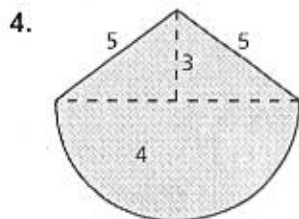
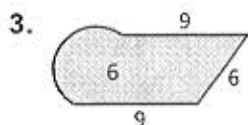
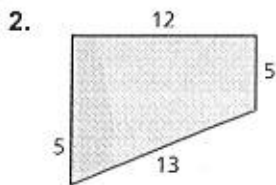
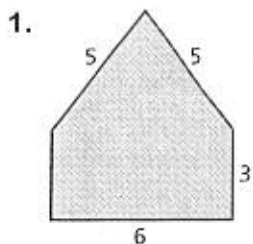


13.2 Puzzle Time

What Is The Building In Your City That Has The Most Stories?

Write the letter of each answer in the box containing the exercise number.

Find the perimeter of the figure.

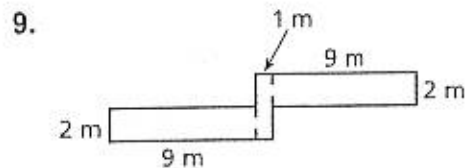
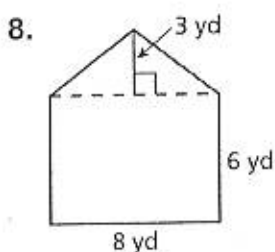
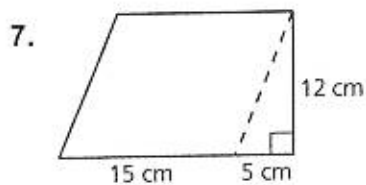
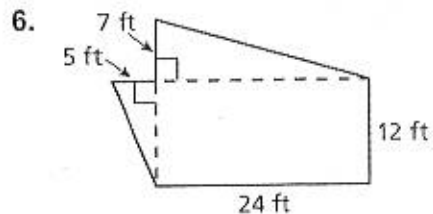
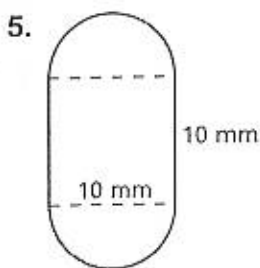
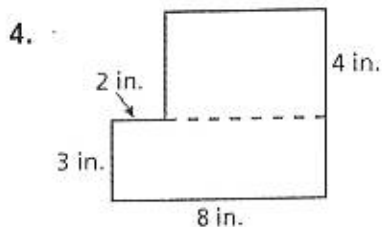
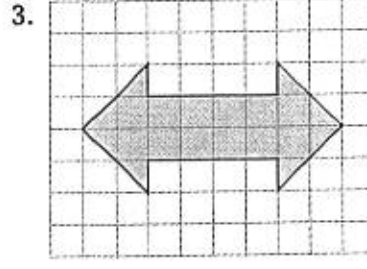
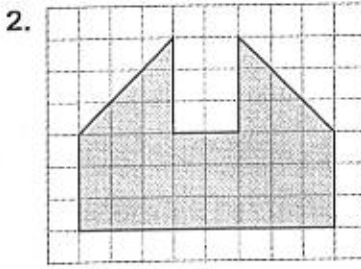
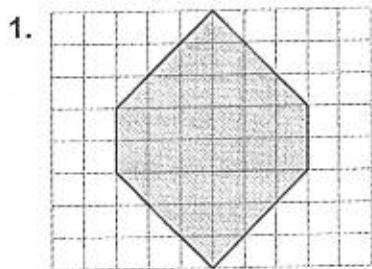


Answers	
R.	22.56
B.	40
I.	30.28
Y.	33.42
R.	82.24
L.	22
A.	74.82

1	6	2	5	7	4	3
---	---	---	---	---	---	---

13.4 Practice A

Find the area of the figures below. Round to the nearest tenth (if needed).



10. A garden is made up of two squares and a quarter circle. What are the perimeter and area of the garden?

