

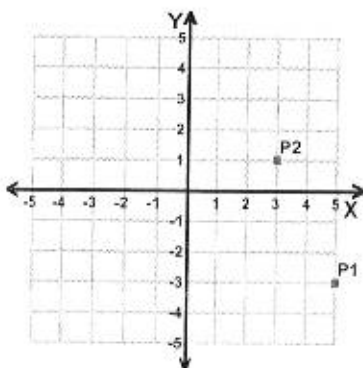
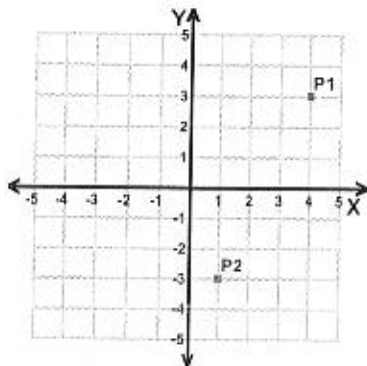
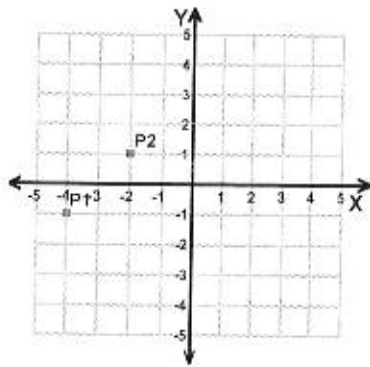
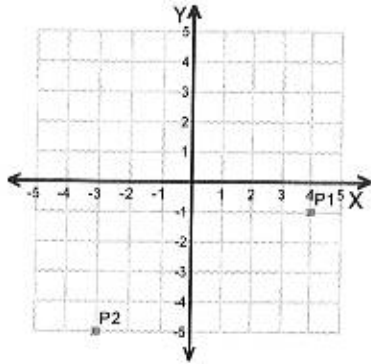
Name : _____

Score : _____

Teacher : _____

Date : _____

Find the distance between the points.



Handwriting practice lines consisting of 16 horizontal dashed lines for writing the answers.



Name _____ Date _____ Hour _____

Warm up Review: Real Number System

Choose the correct description of the Real Number indicated and give evidence to support why it is rational or irrational.

• 1. -5

- A. Rational
- B. Irrational

• 2. 155.3333333333333

- A. Rational
- B. Irrational

• 3. 6.125

- A. Rational
- B. Irrational

• 4. 3.141592653589....

- A. Rational
- B. Irrational

• 5. $\sqrt{100}$

- A. Rational
- B. Irrational

• 6. $\sqrt{45}$

- A. Rational
- B. Irrational

• 7. $\frac{3}{4}$

- A. Rational
- B. Irrational