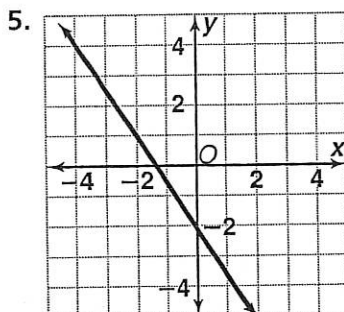
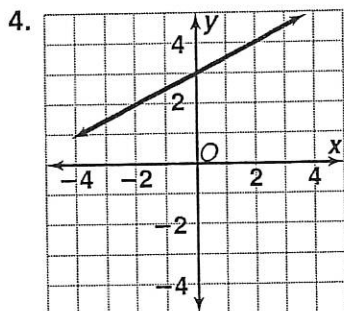
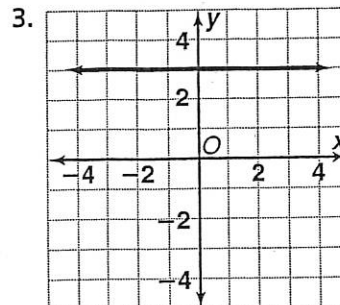
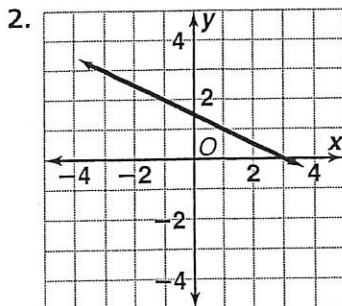
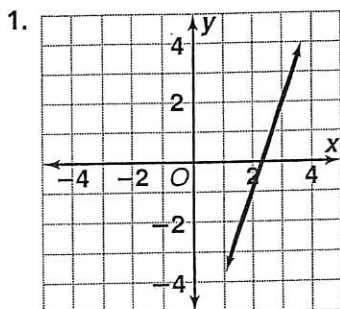


Skill: Finding Slope

Investigation 4

Moving Straight Ahead

Find the slope of each line.



Solve the following without a calculator.

$$0.15 \times (-0.6)$$

$$\left(-\frac{2}{5}\right)\left(-1\frac{1}{4}\right)$$

$$\frac{2}{3} \cdot \left(-2\frac{1}{4}\right) \cdot \left(-1\frac{1}{2}\right)$$