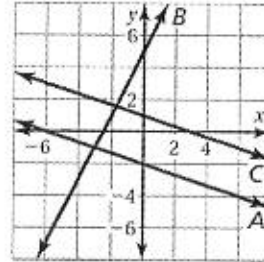


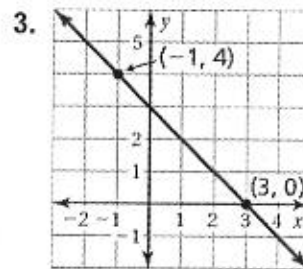
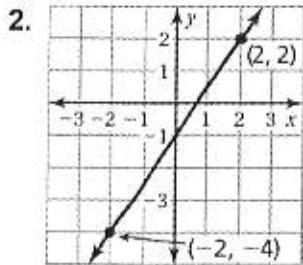
Slope and Slope Intercept form Review ws

1. Refer to the graph.

- a. Which lines have negative slopes?
- b. Which line has the steepest slope?
- c. Are any two of the lines parallel? Explain.



Find the slope of the line.



Find the slope of the line through the given points.

4. $(-1, -4), (1, 4)$

5. $(1, 2), (-3, 2)$

The points in the table lie on a line. Find the slope of the line.

5.

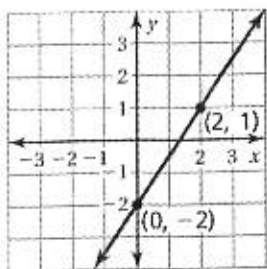
x	0	2	4	6
y	-4	-1	2	5

6.

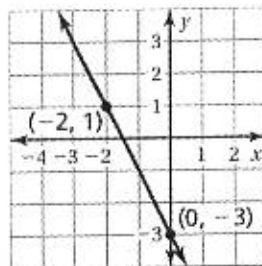
x	-4	-1	0	3
y	7	4	3	0

Write the equation for the given linear relationships.

7.



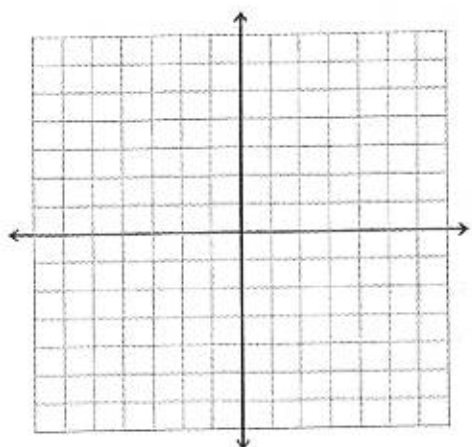
8.



9. (1, 4) and (3, -2)

10. (4, 3) and (6, -3)

11. $y = \frac{-1}{3}x + 3$



12. $y = -3 + 5x$

